

Thursday 18th March 2021

LO: I can count on and back in multiples of 5.

5

10

20

15

25

Practice counting in 5's following the pattern.

1	2	3	4	5	6	7	8	9	10
11	12	13	14	15	16	17	18	19	20
21	22	23	24	25	26	27	28	29	30
31	32	33	34	35	36	37	38	39	40
41	42	43	44	45	46	47	48	49	50



Can you do it without looking?

What is the pattern you can see?

Can you work out the missing numbers from under the yellow squares?





Write them down

				?					10
				15					?
				?					30
				35					40
				?					?

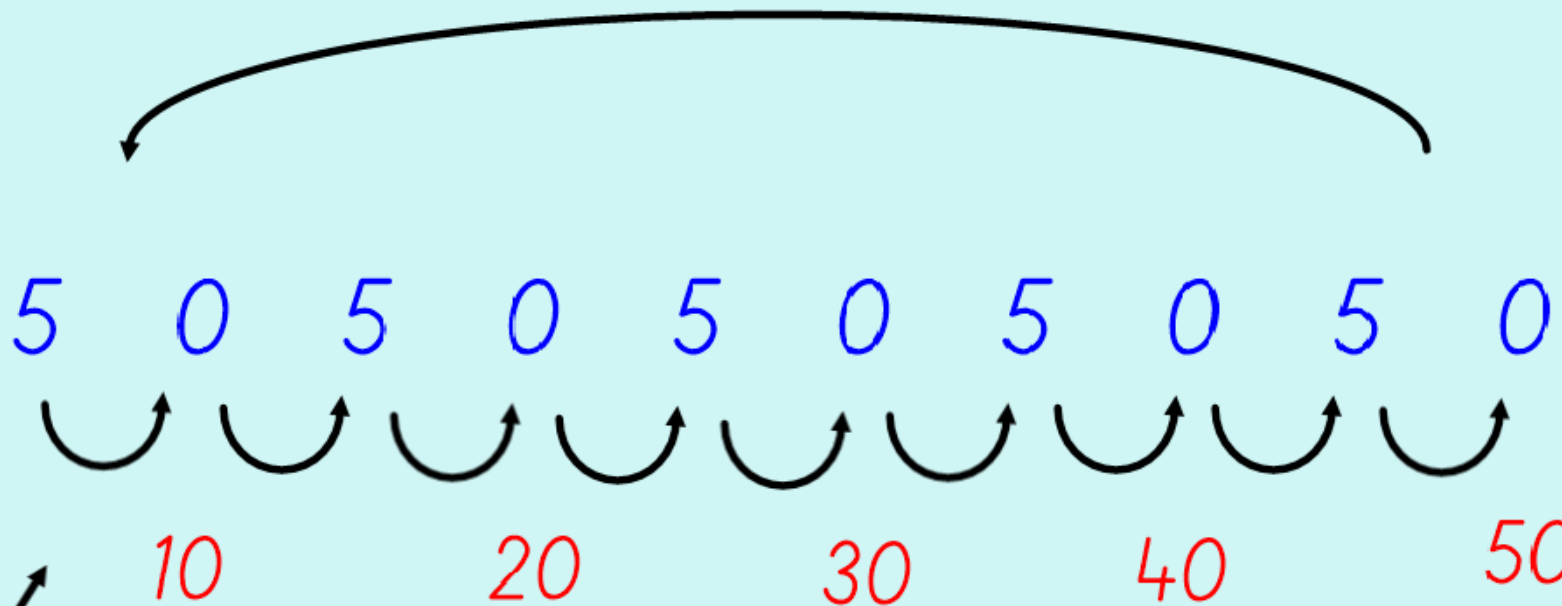
Don't forget to count in 5's

Follow the pattern: 5, 0, 5, 0, 5, 0

Did you work out the missing numbers from under the yellow squares?

Check your answers!  

				5					10
				15					20
				25					30
				35					40
				45					50



Use the pattern to help you count in 5's.

Don't forget every time you get to a 0 you add a 10!

Activity Time

LO: I can count on and back in 5's.

Complete the number square below:

1	2	3	4		6	7	8	9	
11	12	13	14		16	17	18	19	
21	22	23	24		26	27	28	29	
31	32	33	34		36	37	38	39	
41	42	43	44		46	47	48	49	

Complete the following sequences:

5	10				30	
---	----	--	--	--	----	--

15		25		35		45
----	--	----	--	----	--	----

		20	25			40
--	--	----	----	--	--	----

	25			40		50
--	----	--	--	----	--	----

10		20		30		40
----	--	----	--	----	--	----

25						55
----	--	--	--	--	--	----

Fill in the missing numbers to complete the number lines.

If you need more practice have a go writing down multiples of 5 using the last slide as a prompt.

If you want a challenge have a look at the problem solving task.

Well done!!

*Challenge yourself to count in 5's
throughout the day!*