

Animals Including Humans Assessment Test

1. Write the name of each animal.

a)



b)



c)



d)



a) _____


b) _____

c) _____

d) _____

4 marks

2. Match the animals to their group.



amphibian

bird

mammal

fish

reptile

5 marks

3. Write one feature of each group.

Amphibians

Fish

Birds

Mammals

Reptiles



5 marks

4. Explain what each of these diets is.

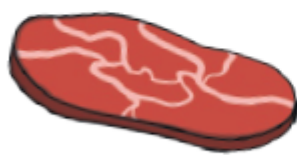
Carnivore

Herbivore


Omnivore



3 marks



5. Sort these animals by what they eat.



Carnivore	<input type="checkbox"/>	<input type="checkbox"/>
Omnivore	<input type="checkbox"/>	<input type="checkbox"/>
Herbivore	<input type="checkbox"/>	<input type="checkbox"/>

6 marks